



UNIVERSITY OF SWAZILAND
Faculty of Health Sciences
Department of Environmental Health Science

**BACHELOR OF NURSING SCIENCE
FINAL EXAMINATION PAPER 2018**

- TITLE OF PAPER : ORGANIC CHEMISTRY AND BIOCHEMISTRY
FOR NURSES
SCIENCES
- COURSE CODE : GNS 112
- DURATION : 2 HOURS
- MARKS : 100
- INSTRUCTIONS :
- : READ THE QUESTIONS & INSTRUCTIONS CAREFULLY
 - : ANSWER **ANY FOUR** QUESTIONS
 - : EACH QUESTION **CARRIES 25** MARKS.
 - : WRITE NEATLY & CLEARLY
 - : NO PAPER SHOULD BE BROUGHT INTO OR OUT OF THE EXAMINATION ROOM.
 - : BEGIN EACH QUESTION ON A SEPARATE SHEET OF PAPER.

DO NOT OPEN THIS QUESTION PAPER UNTIL PERMISSION IS GRANTED BY
THE INVIGILATOR.

QUESTION ONE

a. C_2H_5Br undergoes a substitution reaction to produce a corresponding alcohol.

(i) What type of substitution reaction will the alkyl halide undergo?

[3 Marks]

(ii) Give two reasons for your answer in (i).

[4 Marks]

(iii) Draw a 3-D structure of the reactant and the product?

[6 Marks]

b. Draw saturated structures for the following compounds and fill in non-bonding valence electrons where they can be found.

i) 1,2-dichloroethane

ii) *N,N* diethyl amine

iii) Dimethyl ether

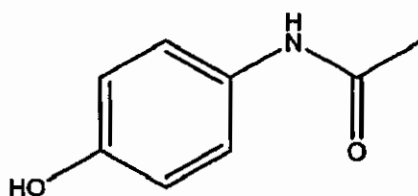
iv) 2-bromo-4-methoxyhexanoic acid

[12 Marks]

QUESTION TWO

a. Identify all functional groups in the following compounds

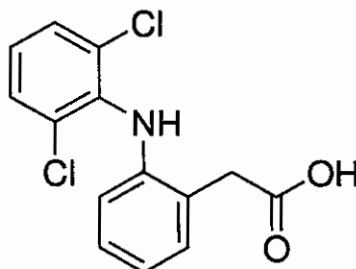
(i)



Paracetamol

(ii)

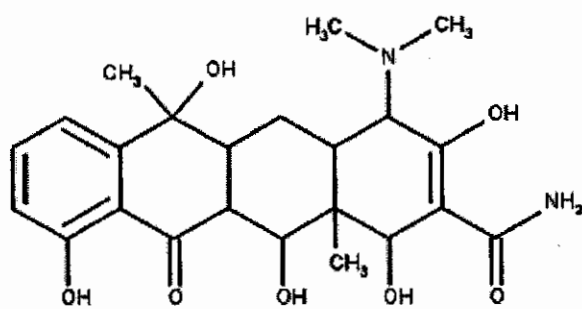
[4 Marks]



Diclofenac

(iii)

[6 Marks]



Tetracycline

[6 Marks]

- b. Explain how antioxidant enzymes function and give three examples of antioxidant enzymes (use chemical equations in your answer). [9 Marks]

QUESTION THREE

- a. The general formula of cellulose can be represented as $(C_6H_{10}O_5)_x$. If the molecular weight of a molecule of cellulose is 400,000, what is the estimated value of x ? [7 Marks]
- b. What is the function of a hydrolase enzyme? [4 Marks]
- c. The most common lipids are triglycerides formed from _____ [4 Marks]
- d. Compare S_N1 and S_N2 reactions and state the factors that affect these reactions. [10 Marks]

QUESTION FOUR

- a. Fill in the blanks in the following statements.
- Protein denaturation consists of disruption of _____
 - Some steroids are _____ that act as "messengers" from one part of the body to another.
 - Deoxyribonucleic acid (DNA) and ribonucleic acid (RNA) are the two major kinds of _____
 - Biochemical processes that involve the alteration of biomolecules are termed as _____

- (v) Enzymes are proteinaceous substances with highly specific structures that function as biochemical _____
[5 × 3Marks]
- b. What is the difference between elimination and addition reactions? Give examples of each type of reaction. [6 Marks]
- c. Draw all structural isomers of pentene, C₅H₁₀, that have unbranched carbon chains. [4 Marks]

QUESTION FIVE

- a. Define, with examples, what is meant by isomerism. [4 Marks]
- b. Use the two forms of 1,2-dichloroethene to illustrate *cis-trans* isomerism.
[6 Marks]
- c. Draw structures of the compounds described below and give the IUPAC name for each structure
- (i) A compound with five carbons, ketone functional group on the second carbon and a methoxy substituent on the fourth carbon.
- (ii) A benzene ring with three nitro groups on positions 1,3,5 and a methyl group on the fourth position.
- (iii) An unsaturated compound, C₄H₈, undergoes a halogenation reaction to produce dichloride product, A. Draw all possible molecular structures of Product A.
[15 Marks]

General data and fundamental constants

Quantity	Symbol	Value
Speed of light	c	$2.997\,924\,58 \times 10^8 \text{ m s}^{-1}$
Elementary charge	e	$1.602\,177 \times 10^{-19} \text{ C}$
Faraday constant	$F = N_A e$	$9.6485 \times 10^4 \text{ C mol}^{-1}$
Boltzmann constant	k	$1.380\,66 \times 10^{-23} \text{ J K}^{-1}$
Gas constant	$R = N_A k$	$8.314\,51 \text{ J K}^{-1} \text{ mol}^{-1}$
		$8.205\,78 \times 10^3 \text{ dm}^3 \text{ atm K}^{-1} \text{ mol}^{-1}$
		$6.2364 \times 10 \text{ L Torr K}^{-1} \text{ mol}^{-1}$
Planck constant	h	$6.626\,08 \times 10^{-34} \text{ J s}$
	$\hbar = h/2\pi$	$1.054\,57 \times 10^{-34} \text{ J s}$
Avogadro constant	N_A	$6.022\,14 \times 10^{23} \text{ mol}^{-1}$
Atomic mass unit	u	$1.660\,54 \times 10^{-27} \text{ Kg}$
Mass		
electron	m_e	$9.109\,39 \times 10^{-31} \text{ Kg}$
proton	m_p	$1.672\,62 \times 10^{-27} \text{ Kg}$
neutron	m_n	$1.674\,93 \times 10^{-27} \text{ Kg}$
Vacuum permittivity	$\epsilon_0 = 1/c^2 \mu_0$	$8.854\,19 \times 10^{-12} \text{ J}^{-1} \text{ C}^2 \text{ m}^{-1}$
	$4\pi\epsilon_0$	$1.112\,65 \times 10^{-10} \text{ J}^{-1} \text{ C}^2 \text{ m}^{-1}$
Vacuum permeability	μ_0	$4\pi \times 10^{-7} \text{ J s}^2 \text{ C}^{-2} \text{ m}^{-1}$
		$4\pi \times 10^{-7} \text{ T}^2 \text{ J}^{-1} \text{ m}^3$
Magneton		
Bohr	$\mu_B = e\hbar/2m_e$	$9.274\,02 \times 10^{-24} \text{ J T}^{-1}$
nuclear	$\mu_N = e\hbar/2m_p$	$5.050\,79 \times 10^{-27} \text{ J T}^{-1}$
g value	g_e	2.002 32
Bohr radius	$a_0 = 4\pi\epsilon_0 \hbar^2 / m_e e^2$	$5.291\,77 \times 10^{-11} \text{ m}$
Fine-structure constant	$\alpha = \mu_0 e^2 c / 2\hbar$	$7.297\,35 \times 10^{-3}$
Rydberg constant	$R_\infty = m_e e^4 / 8\hbar^3 c \epsilon_0^2$	$1.097\,37 \times 10^7 \text{ m}^{-1}$
Standard acceleration of free fall	g	$9.806\,65 \text{ m s}^{-2}$
Gravitational constant	G	$6.672\,59 \times 10^{-11} \text{ N m}^2 \text{ Kg}^{-2}$

Conversion factors

1 cal	=	4.184 joules (J)	1 erg	=	$1 \times 10^{-7} \text{ J}$
1 eV	=	$1.602\,2 \times 10^{-19} \text{ J}$	1 eV/molecule	=	96 485 kJ mol ⁻¹

Prefixes	f	p	n	μ	m	c	d	k	M	G
	femto	pico	nano	micro	milli	centi	deci	kilo	mega	giga
	10^{-15}	10^{-12}	10^{-9}	10^{-6}	10^{-3}	10^{-2}	10^{-1}	10^3	10^6	10^9

PERIODIC TABLE OF ELEMENTS

GROUPS

PERIODS	GROUPS																		
	I	II	III	IV	V	VI	VII	VIII	IX	X	IB	IIB	IIIA	IVA	V	VIA	VIIA	VIIIA	
1	1.008 H																	4.003 He	
2	6.941 Li	9.012 Be																18.998 F	20.180 Ne
3	22.990 Na	24.305 Mg																35.453 Cl	39.948 Ar
4	39.098 K	40.078 Ca	44.956 Sc	47.88 Ti	50.942 V	51.996 Cr	54.938 Mn	55.847 Fe	58.933 Co	58.69 Ni	63.546 Cu	65.39 Zn	69.723 Ga	72.61 Ge	74.922 As	78.96 Se	79.904 Br	83.80 Kr	
5	85.468 Rb	87.62 Sr	88.906 Y	91.224 Zr	92.906 Nb	95.94 Mo	98.907 Tc	101.07 Ru	102.91 Rh	106.42 Pd	107.87 Ag	112.41 Cd	114.82 In	118.71 Sn	121.75 Sb	127.60 Te	126.90 I	131.29 Xe	
6	132.91 Cs	137.33 Ba	138.91 *La	178.49 Hf	180.95 Ta	183.85 W	186.21 Re	190.2 Os	192.22 Ir	195.08 Pt	196.97 Au	200.59 Hg	204.38 Tl	207.2 Pb	208.98 Bi	(209) Po	(210) At	(222) Rn	
7	223 Fr	226.03 Ra	(227) **Ac	(261) Rf	(262) Ha	(263) Unh	(262) Uns	(265) Uno	(266) Une	(267) Uun									

TRANSITION ELEMENTS

Atomic mass →
Symbol →
Atomic No. →

*Lanthanide Series

**Actinide Series

140.12 Ce	140.91 Pr	144.24 Nd	(145) Pm	150.36 Sm	151.96 Eu	157.25 Gd	158.93 Tb	162.50 Dy	164.93 Ho	167.26 Er	168.93 Tm	173.04 Yb	174.97 Lu
232.04 Th	231.04 Pa	238.03 U	237.05 Np	(244) Pu	(243) Am	(247) Cm	(247) Bk	(251) Cf	(252) Es	(257) Fm	(258) Md	(259) No	(260) Lr

() indicates the mass number of the isotope with the longest half-life.